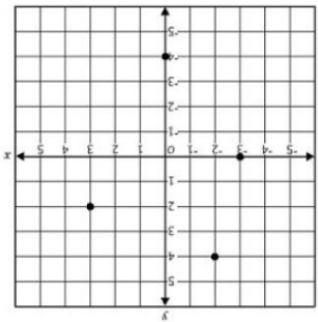


Finding the Domain and Range of Discrete Functions



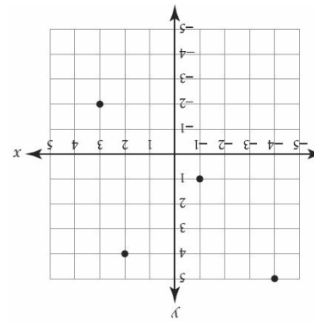
Domain:

Range:

x	y
-3	2
0	2
3	-3
6	-5

Domain:

Range:



Domain:

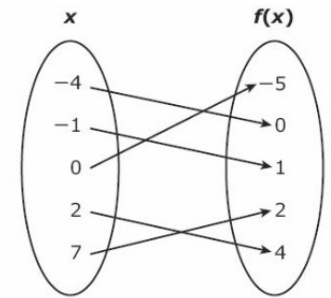
Range:

$\{(-2, 3), (0, 4), (1, 1), (6, 0)\}$

x	y
-5	-23
-2	-14
0	-8
3	1
6	10

Domain:

Range:



Domain:

Range: