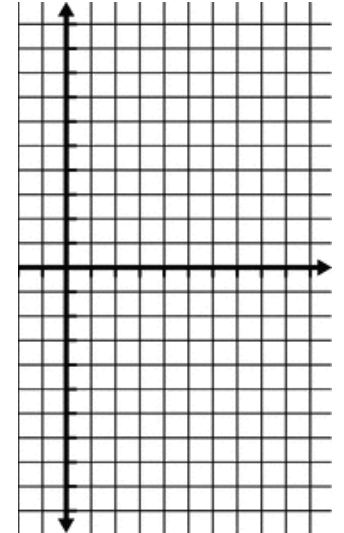


FINDING THE RULE FOR AN ARITHMETIC SEQUENCE

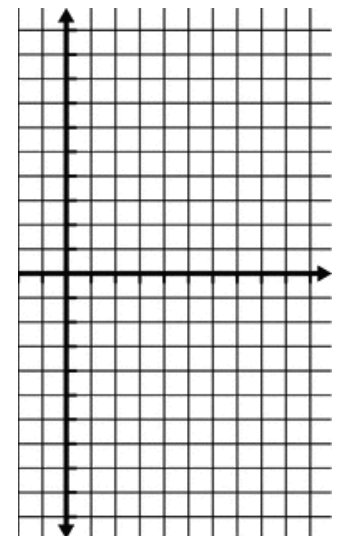
Sequence
0, 3, 6, 9, 12, ...
Rule

term #	value



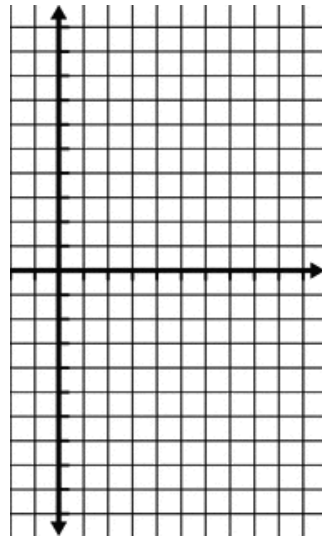
Sequence
4, 2, 0, -2, -4, ...
Rule

term #	value



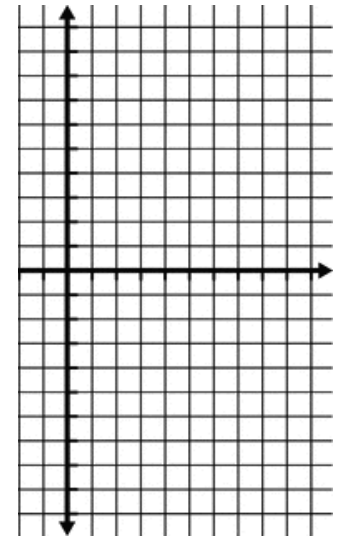
Sequence
-5, -1, 3, 7, 11, ...
Rule

term #	value



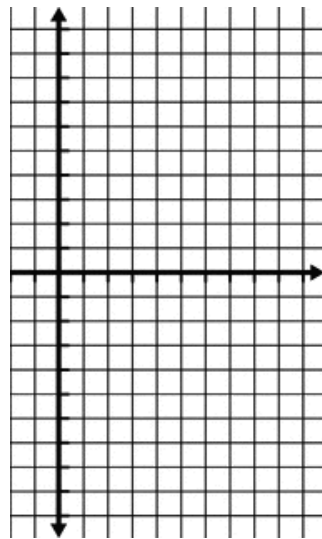
Sequence
6, 5, 4, 3, 2, 1, ...
Rule

term #	value



Sequence
8, 5, 2, -1, -4, ...
Rule

term #	value



Sequence
-7, -5, -3, -1, 1, ...
Rule

term #	value

