




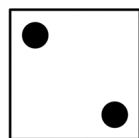



GAMBLER'S DIE



These nine blocks can be arranged to make a regular gambler's die. The dots must appear in the correct pattern on each face as shown below. To be a correct solution, opposite faces must also add up to seven.



Can you do it?