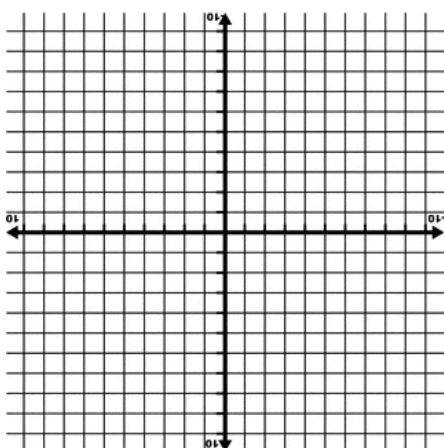
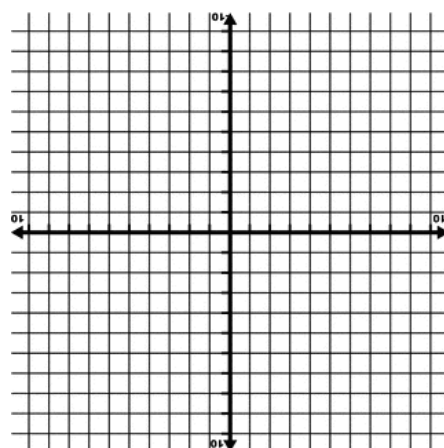


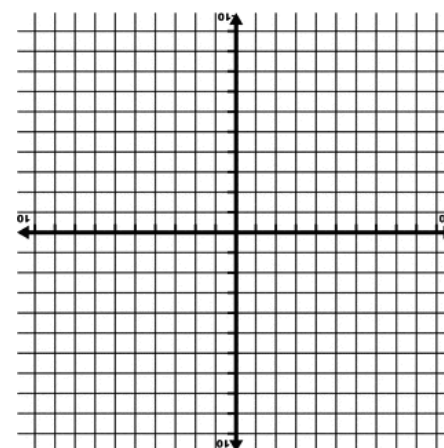
$$y \leq 2x + 1$$



$$x - y < 3$$



$$3x - 4y < 12$$



$$2x + y < -2$$

$$y \geq \frac{2}{3}x + 3$$

$$2x - 4y \leq -8$$

Graphing Linear Inequalities Practice #1

