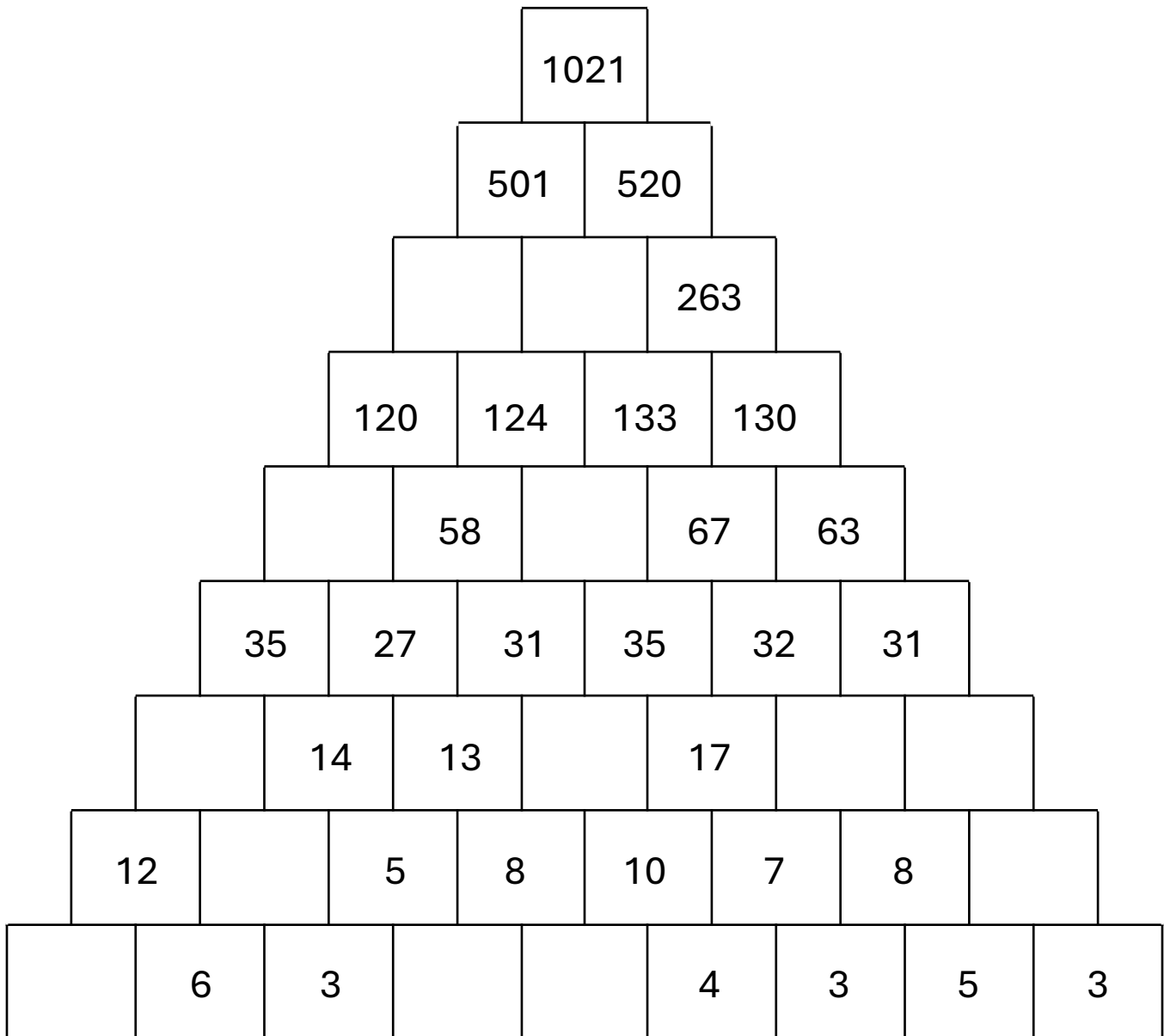


# NUMBER PYRAMID PUZZLE

## LEVEL 1

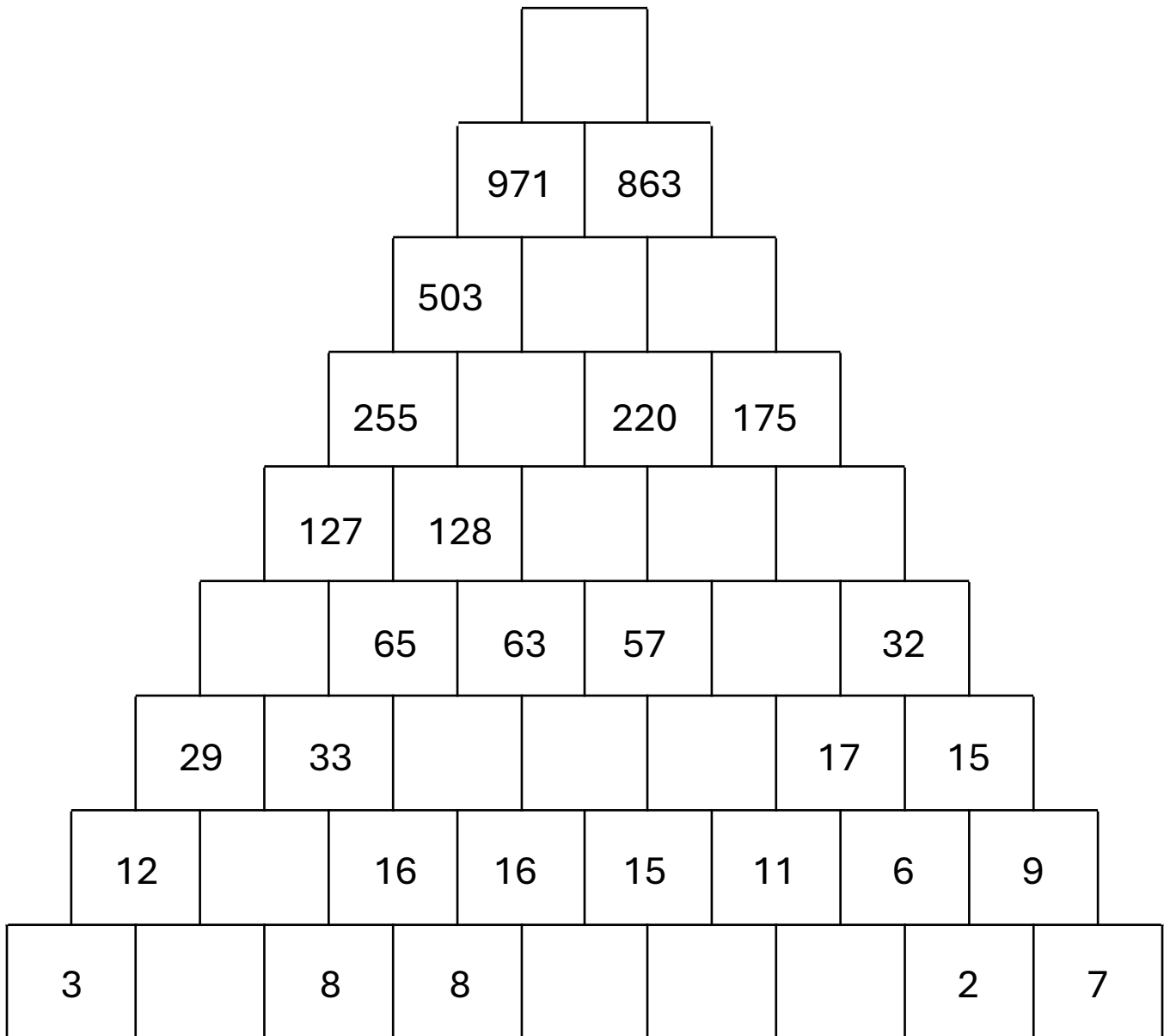
The number in each cell of the pyramid is the sum of the two numbers directly below it. Fill in the missing numbers to complete the number pyramid puzzle.



# NUMBER PYRAMID PUZZLE

## LEVEL 2

The number in each cell of the pyramid is the sum of the two numbers directly below it. Fill in the missing numbers to complete the number pyramid puzzle.



# NUMBER PYRAMID PUZZLE

## LEVEL 3

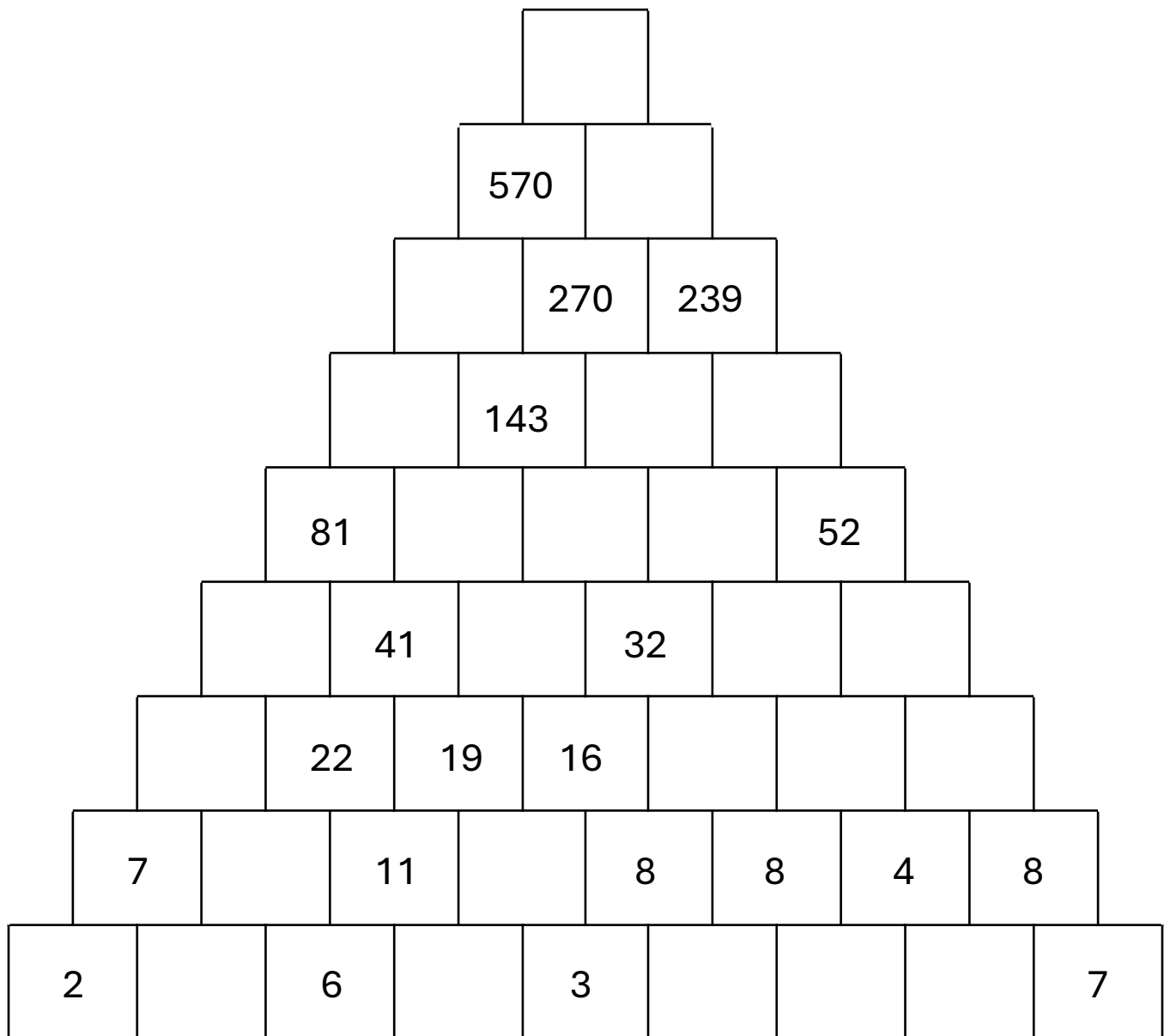
The number in each cell of the pyramid is the sum of the two numbers directly below it. Fill in the missing numbers to complete the number pyramid puzzle.

|   |   |    |  |     |     |     |    |   |    |   |  |
|---|---|----|--|-----|-----|-----|----|---|----|---|--|
|   |   |    |  |     |     |     |    |   |    |   |  |
|   |   |    |  | 556 |     | 405 |    |   |    |   |  |
|   |   |    |  |     | 239 |     |    |   |    |   |  |
|   |   |    |  |     |     |     | 96 |   | 70 |   |  |
|   |   |    |  |     | 83  |     |    |   |    |   |  |
|   |   | 46 |  | 45  |     | 38  |    |   |    |   |  |
|   |   | 24 |  | 22  |     |     |    |   |    | 7 |  |
|   |   |    |  |     |     |     |    | 4 |    |   |  |
|   |   |    |  |     |     |     |    |   |    | 9 |  |
| 7 | 7 |    |  |     | 2   |     | 1  |   |    | 6 |  |

# NUMBER PYRAMID PUZZLE

## LEVEL 4

The number in each cell of the pyramid is the sum of the two numbers directly below it. Fill in the missing numbers to complete the number pyramid puzzle.



# NUMBER PYRAMID PUZZLE

## LEVEL 5

The number in each cell of the pyramid is the sum of the two numbers directly below it. Fill in the missing numbers to complete the number pyramid puzzle.

