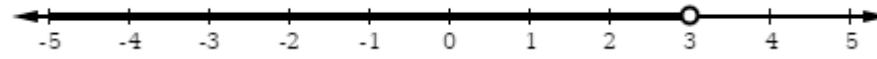
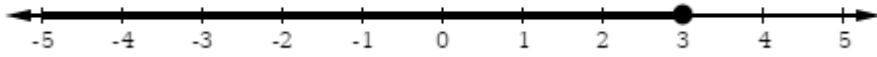


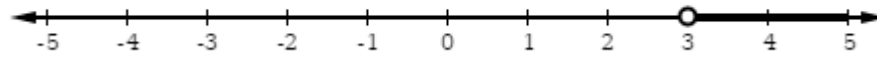
$$x + 1 = 4$$



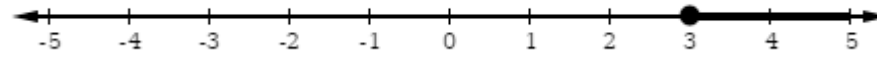
$$x + 1 > 4$$



$$x + 1 \geq 4$$



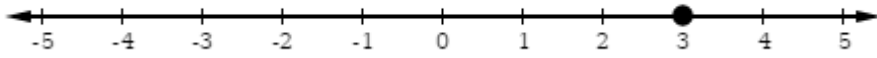
$$x + 1 \leq 4$$



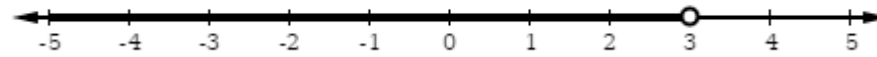
$$x + 1 = 4$$

$$x + 1 < 4$$

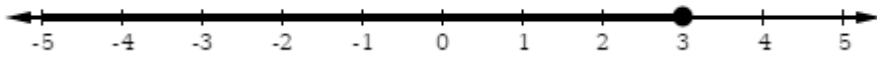
$$x + 1 > 4$$



$$x + 1 \geq 4$$



$$x + 1 \leq 4$$



$$x + 1 < 4$$

