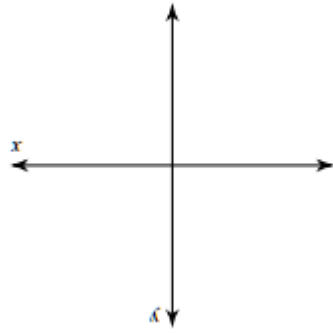
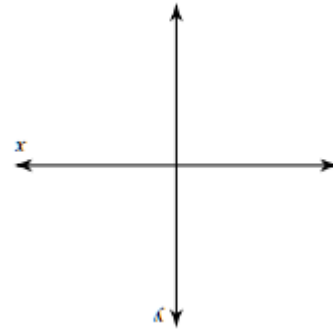


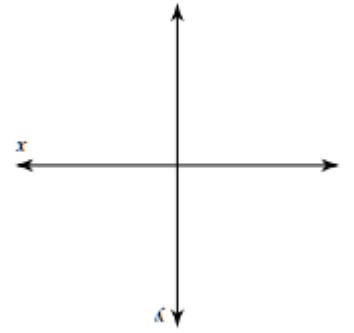
$$\frac{2\pi}{12}$$



$$\frac{9}{7\pi}$$



$$\frac{7}{11}$$

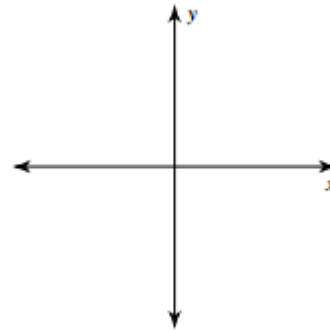


$$\frac{8\pi}{11\pi}$$

Sketching
Angles in
Standard
Form

(Radians)

$$\frac{-2\pi}{3}$$



$$\frac{\pi}{6}$$

