

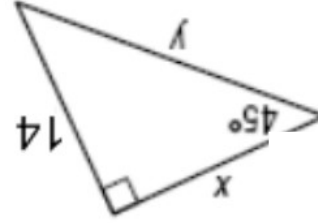
# Special Right Triangles Practice

The altitude of an equilateral triangle is 18 inches. Find the length of a side.

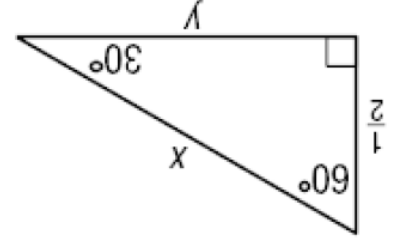
|  |  |  |
|--|--|--|
|  |  |  |
|  |  |  |

The perimeter of a square is 48 meters. Find the length of the diagonal.

|  |  |  |
|--|--|--|
|  |  |  |
|  |  |  |

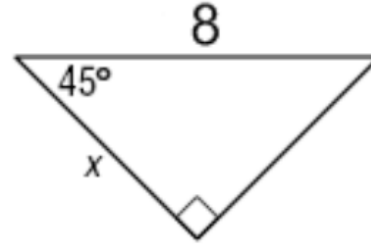


|  |  |  |
|--|--|--|
|  |  |  |
|  |  |  |



|  |  |  |
|--|--|--|
|  |  |  |
|  |  |  |

|  |  |  |
|--|--|--|
|  |  |  |
|  |  |  |



|  |  |  |
|--|--|--|
|  |  |  |
|  |  |  |

