

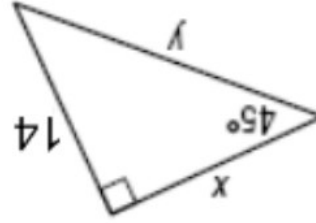
Special Right Triangles Practice

The altitude of an equilateral triangle is 18 inches. Find the length of a side.

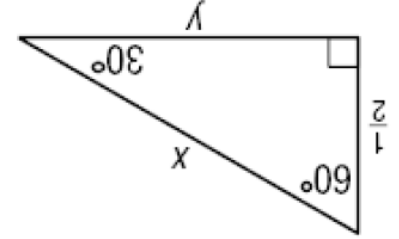
30-60-90 or 45-45-90
Side Length Ratios: _____

The perimeter of a square is 48 meters. Find the length of the diagonal.

30-60-90 or 45-45-90
Side Length Ratios: _____

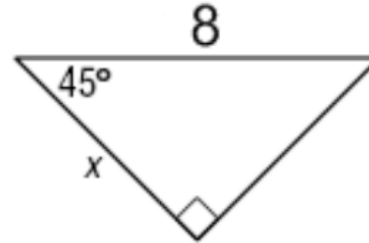


30-60-90 or 45-45-90
Side Length Ratios: _____



30-60-90 or 45-45-90
Side Length Ratios: _____

30-60-90 or 45-45-90
Side Length Ratios: _____



30-60-90 or 45-45-90
Side Length Ratios: _____

